

中文姓名: _____

10(28)-5

英文姓名: _____

成績: _____

$$\begin{array}{r} \square 2 \\ + \quad \square \\ \hline 5 3 \end{array} \quad \begin{array}{r} 2 3 \\ - \quad 7 \\ \hline \end{array}$$

$\begin{array}{r} 3 9 \\ - 3 8 \\ \hline \end{array}$	$\begin{array}{r} 3 1 \\ + 3 8 \\ \hline \end{array}$	$\begin{array}{r} 2 2 \\ - 1 1 \\ \hline \end{array}$

1. Please draw the clock hands:

1. 画时针跟分针：




二点。

02:00.

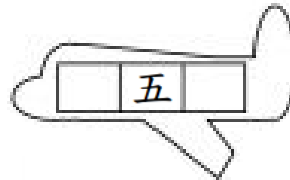
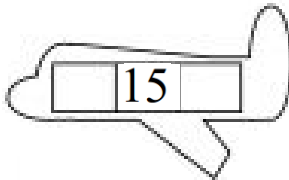
2. Please write down what time it is:

2. 这是几点？



Please write down before and after numbers:

For calendar question: before number is yesterday's date & after number is tomorrow's date.



1.Q: 今天是几月几号/日?

1.A: _____

1.Q: 今天星期几?

1.A: _____

2.Q: 明天是几月几号/日?

2.A: _____

2.Q: 明天星期几?

2.A: _____

3.Q: 昨天是几月几号/日?

3.A: _____

3.Q: 昨天星期几?

3.A: _____

Q: What is the date today?

A: _____

Q: What is the day of the week today?

A: _____

Q: What is the date tomorrow?

A: _____

Q: What is the day of the week tomorrow?

A: _____

Q: What was the date yesterday?

A: _____

Q: What was the day of the week yesterday?

A: _____



- 1. 今天是三月十五日。
- 1. 今天是星期五。
- 2. 明天是三月十六日。
- 2. 明天是星期六。
- 3. 昨天是三月十四日。
- 3. 昨天是星期四。