

中文姓名: _____

16(34)-5

英文姓名: _____

成績: _____

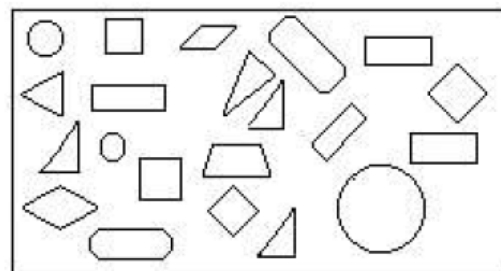

4 5	1 5
- 1 4	+ 4 3

8	8	2 0
+ 1 8	+ 2	+ 7
+ 1 2	+ 9	+ 1

1 5	1 3	9
- 6	- 2	- 5
- 3	- 6	- 3

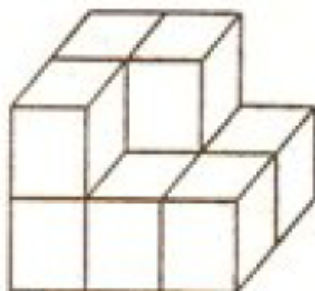
Count the amount of 2D shapes (e.g. circle, square, triangle, etc) and then fill the numbers inside the parenthesis.

○有()个
 □有()个
 △有()个
 ◻有()个



□ 有()个
 ◻ 有()个
 △ 有()个
 ○ 有()个

Count the number of cubes.



() 个

For each row, count the number of missing block. Write the numbers down from those 4 rows and then add them.



() + () + () + () = () 个