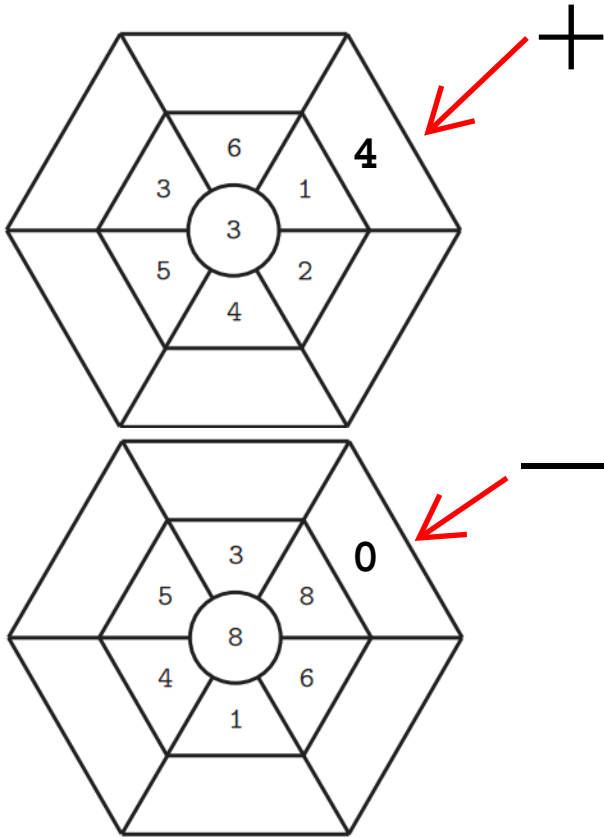



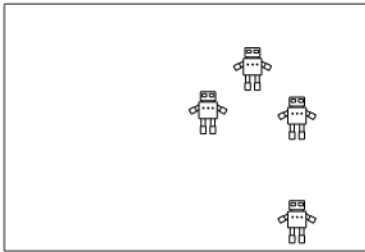
英文姓名: _____

成績: _____

(1) Read plus or minus sign first. (2) Do your addition or subtraction problems.



		3	4		9	1	
+	4	-	3	-	3	+	6



(a) $4 + 5 = (\quad)$

(c) $9 - 4 = (\quad)$

(b) $5 + 4 = (\quad)$

(d) $9 - 5 = (\quad)$